

Unit 9

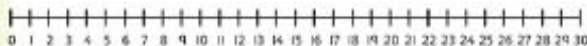
Numbers to 50



In this unit we will ...




- ⚡ Count up to 50
- ⚡ Compare numbers to 50
- ⚡ Order numbers
- ⚡ Count in 2s and 5s
- ⚡ Solve word and picture problems

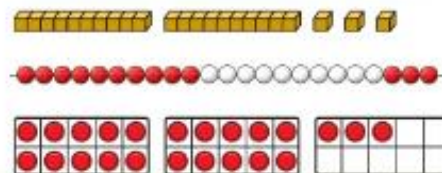
We can use a number line to help us order and compare numbers. Which number is larger, 12 or 21?



We will need some maths words and signs.
Do you remember these?


tens	ones
compare	order
less than (<)	greater than (>)

We can use different things to show the value of a number. We can use ,  or . What number is shown here?



Power Up

Work out which number went in.



Complete the sentences:

I more than is .

I less than is .



I'm going to put another number in and see what comes out.

Comparing numbers

Discover



Use cubes/ lego if you have them at home.



1 a) Who has done more star jumps?

b) Who has done more sit-ups?

Think together

1

Anya



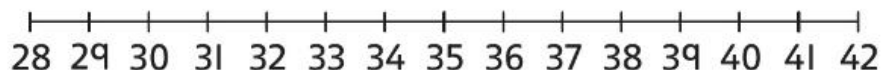
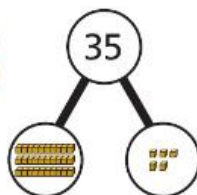
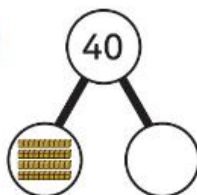
Chen



Anya
40 press-ups

Chen
35 press-ups

Who has done more press-ups?



_____ has done more press-ups.

2

Write all the numbers that could be used to complete each number sentence.

a)

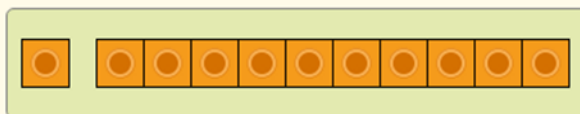
$$\square > 34$$

30	39	34
35	31	33 38

b)

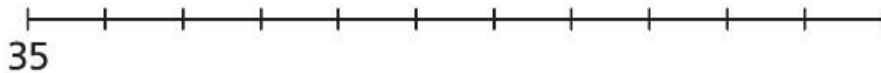
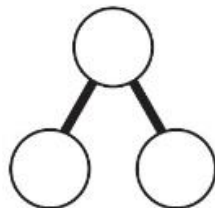
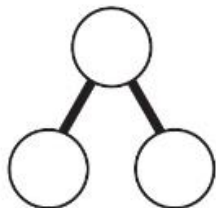
$$\square < 49$$

42	40	46
45	43	48



3 Who swam more lengths?

CHALLENGE



Try to think of all these numbers on a number line.



_____ swam more lengths.



Fluency

write in books



Comparing numbers

- 1 Mo and Jo play a game.

Mo	Jo
24	19

- a) Who has more points? Circle your answer.
b) Complete the number sentence.

- 2 a) Circle the smaller number in each pair.

45	39	21	26
----	----	----	----

- b) Circle the larger number in each pair.

12	21	32	38
----	----	----	----

☐ ☐ ☐ ☐ ☐ ☐ ☐ ☐ ☐ ☐
