




Outdoor fractions

Find these items and then find out what half ($\frac{1}{2}$) and one quarter ($\frac{1}{4}$) would be.

Remember you can put them into groups to help you!

For example, when finding $\frac{1}{2}$ you will put the items into 2 equal groups and count how many items are in one of those groups.

When finding $\frac{1}{4}$ you will put the items into 4 equal groups and find how many items are in one of those groups.

Go and find...	$\frac{1}{2}$ would be	$\frac{1}{4}$ would be
8 		
14 		
8 		
6 of any item of your choice!		